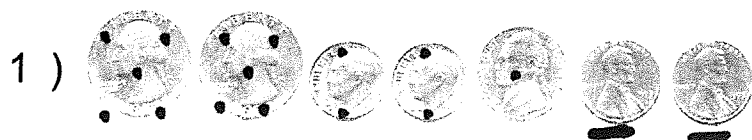


Name : _____


Score : _____

Teacher : _____


Date : _____




\$ _____




\$ _____




\$ _____




\$ _____




\$ _____




\$ _____



\$ _____



\$ _____



\$ _____




Name : _____

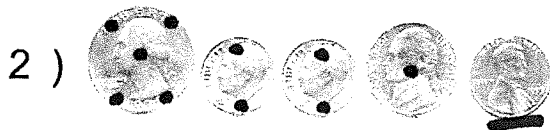
Score : _____

Teacher : _____


Date : _____




\$ _____




\$ _____



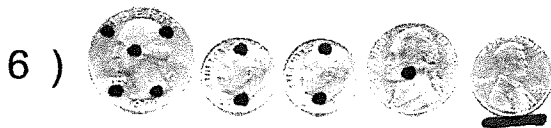
\$ _____




\$ _____




\$ _____




\$ _____



\$ _____



\$ _____



\$ _____




Name : _____


Score : _____

Teacher : _____

Date : _____




\$ _____




\$ _____




\$ _____




\$ _____




\$ _____




\$ _____



\$ _____



\$ _____



\$ _____




Name : _____


Score : _____

Teacher : _____


Date : _____




\$ _____




\$ _____




\$ _____




\$ _____




\$ _____




\$ _____



\$ _____



\$ _____



\$ _____




Name : _____


Score : _____

Teacher : _____


Date : _____




\$ _____




\$ _____




\$ _____




\$ _____




\$ _____




\$ _____



\$ _____



\$ _____




\$ _____



Dot-to-Dot

Name: _____

Count by 2s. What is this? _____



Patchwork Math

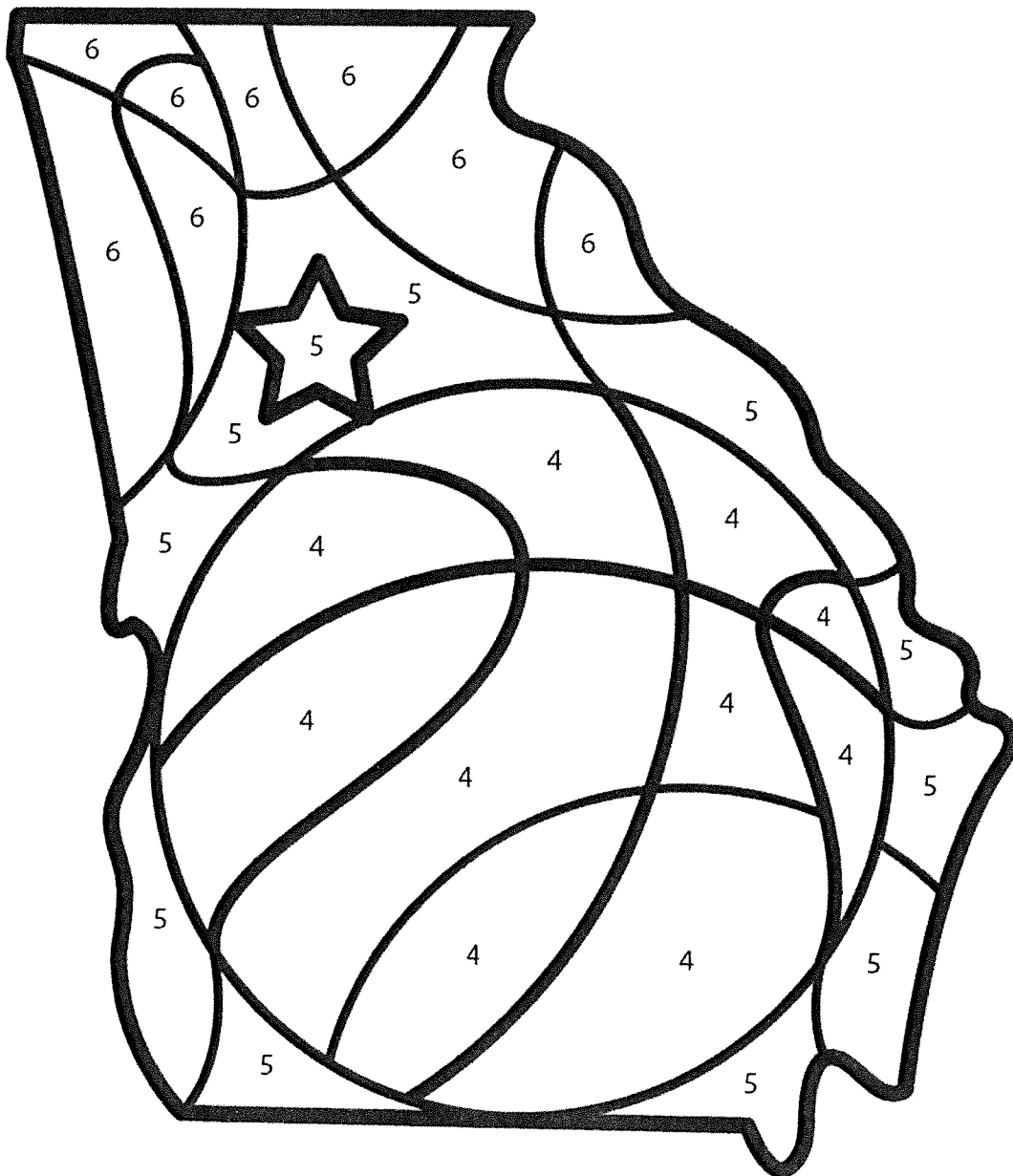
Name: _____

Color the picture of Georgia, using the colors beside the numbers below.

4 = orange

5 = brown

6 = black



What hidden picture did you find?

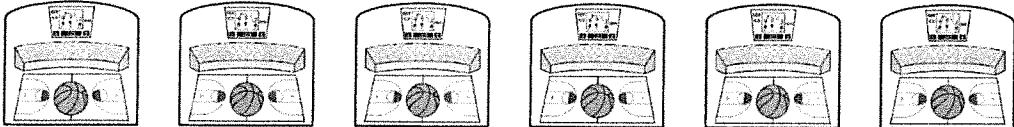
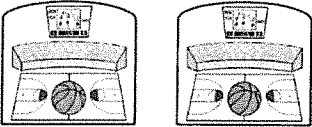


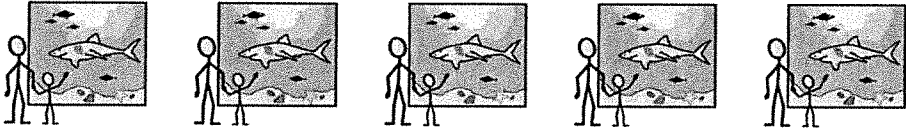

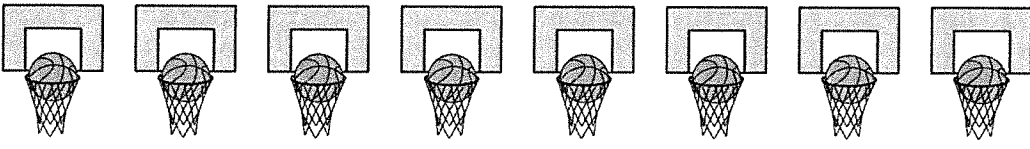

basketball

tournament

Which Is Greater?

Name: _____










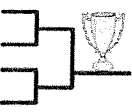



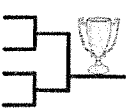

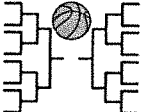
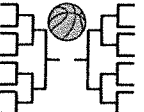

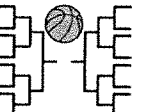
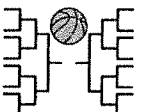

















1. Count the items in each row. Place the number in the box.
2. Place a checkmark in the small box next to the number that is greater.

	Number	Which is greater?
	<div style="border: 1px solid black; width: 80px; height: 80px; margin: 10px;"></div>	<div style="border: 1px solid black; width: 60px; height: 60px; margin: 10px;"></div>
	<div style="border: 1px solid black; width: 80px; height: 80px; margin: 10px;"></div>	<div style="border: 1px solid black; width: 60px; height: 60px; margin: 10px;"></div>
	<div style="border: 1px solid black; width: 80px; height: 80px; margin: 10px;"></div>	<div style="border: 1px solid black; width: 60px; height: 60px; margin: 10px;"></div>
	<div style="border: 1px solid black; width: 80px; height: 80px; margin: 10px;"></div>	<div style="border: 1px solid black; width: 60px; height: 60px; margin: 10px;"></div>
	<div style="border: 1px solid black; width: 80px; height: 80px; margin: 10px;"></div>	<div style="border: 1px solid black; width: 60px; height: 60px; margin: 10px;"></div>
	<div style="border: 1px solid black; width: 80px; height: 80px; margin: 10px;"></div>	<div style="border: 1px solid black; width: 60px; height: 60px; margin: 10px;"></div>
	<div style="border: 1px solid black; width: 80px; height: 80px; margin: 10px;"></div>	<div style="border: 1px solid black; width: 60px; height: 60px; margin: 10px;"></div>
	<div style="border: 1px solid black; width: 80px; height: 80px; margin: 10px;"></div>	<div style="border: 1px solid black; width: 60px; height: 60px; margin: 10px;"></div>

Which Comes Next?

Name: _____

1. Look at each symbol pattern.
2. Circle the symbol that comes next.


    	 
    	 
    	 
     	 
     	 

Time to the Hour

Name: _____


Read the question. Find the answer. Place the time on the clock.

This afternoon my brother and his friends played in a basketball game. What time did the basketball game start?




4:00

8:00




This morning janitors cleaned a stadium. What time did the janitors start cleaning the stadium?




10:00

7:00




This morning a family traveled to Atlanta, Georgia. What time did the family arrive in Atlanta?




11:00

9:00




This afternoon a basketball team had a practice. What time did the practice start?




1:00

2:00




This afternoon a college student went to class. What time did the class start?



4:00

3:00

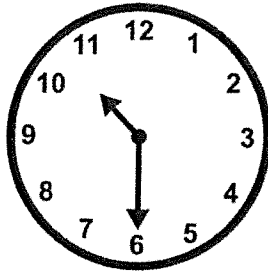


Time to the Half Hour

Name: _____

Read the question. Find the answer. Place the time on the clock.

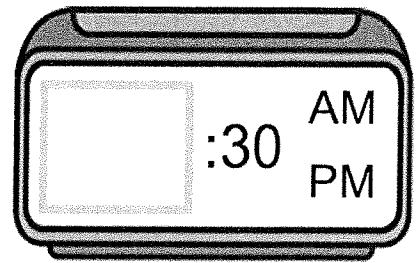
This morning my sister played basketball in gym class. What time did gym class start?



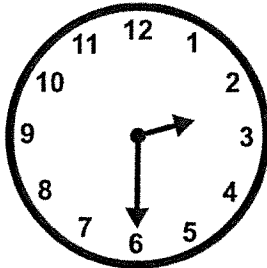
1:30

5:30

10:30




This afternoon a family watched a basketball game on TV. What time did the family start watching the basketball game?



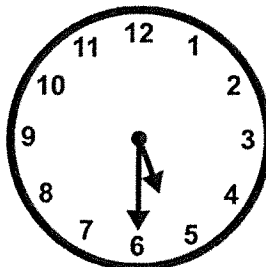
2:30

4:30

6:30




This afternoon my teacher filled in a March Madness bracket. What time did my teacher start filling in the bracket?




3:30

4:30

5:30



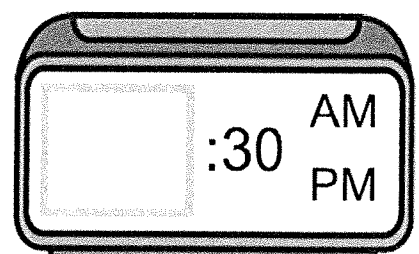
This evening a basketball team had a practice. What time did the practice start?



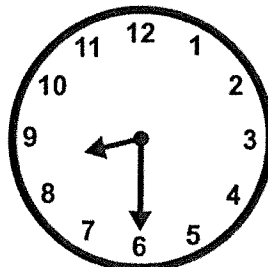
7:30

6:30

5:30



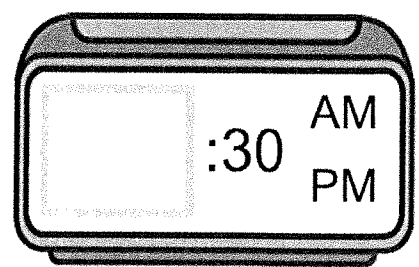
A basketball team played in a tournament today. What time this morning did the tournament start?



8:30

9:30

7:30




Time to the Quarter Hour

Name: _____

Read the question. Find the answer. Place the time on the clock.

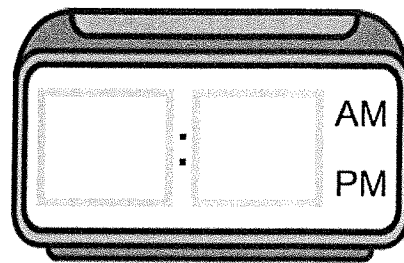
This afternoon a basketball player went for a run. What time did the basketball player start running?



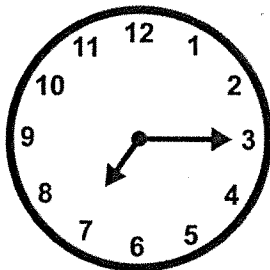
5:15

3:45

12:45



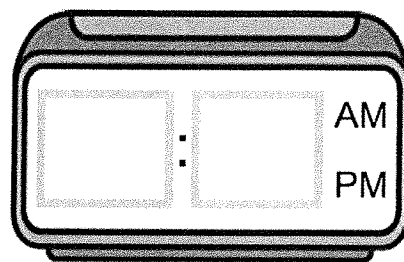
This morning janitors cleaned a stadium. What time did the janitors start cleaning the stadium?



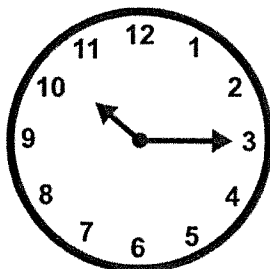
7:15

5:15

9:15



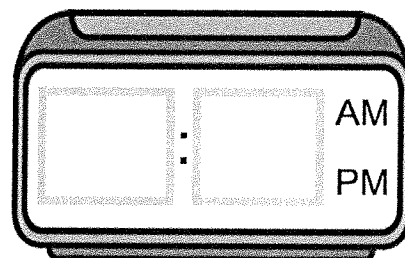
This morning a college basketball player went to a science class. What time did the class start?




8:15

10:15

7:15



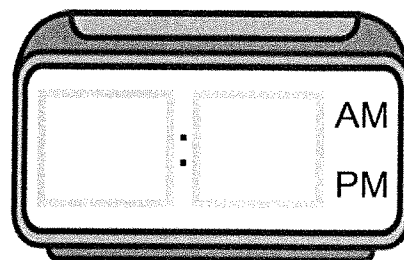
This afternoon a reporter interviewed a basketball coach. What time did the interview start?




3:45

4:45

9:45



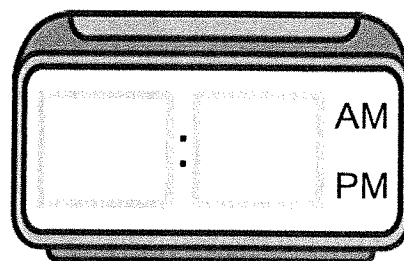
This evening my brother played in a basketball game. What time did the basketball game start?



6:15

7:45






















6:45



Graphing

Name: _____

- Count the number of symbols in each row. Place that number in the last column.
- Answer the questions about the graph.

team									
game									
stadium									
college									
champion									
	1	2	3	4	5	6	7	8	total

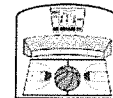


1. Which word has the most symbols?

game



stadium



champion



2. Which word has the fewest symbols?

team



game



college



3. What is the highest number?

1

5

7



4. What is the lowest number?

5

1

4



5. Do any words have the same number?

yes



no

