

Name : _____

Score : _____

Teacher : _____

Date : _____



\$ _____



\$ _____



\$ _____



\$ _____



\$ _____



\$ _____



\$ _____



\$ _____



\$ _____



Name : _____

Score : _____

Teacher : _____

Date : _____



\$ _____



\$ _____



\$ _____



\$ _____



\$ _____



\$ _____



\$ _____



\$ _____



\$ _____



Name : _____

Score : _____

Teacher : _____

Date : _____



\$ _____



\$ _____



\$ _____



\$ _____



\$ _____



\$ _____



\$ _____



\$ _____



\$ _____



Name : _____

Score : _____

Teacher : _____

Date : _____



\$ _____



\$ _____



\$ _____



\$ _____



\$ _____



\$ _____



\$ _____



\$ _____



\$ _____



Name : _____

Score : _____

Teacher : _____

Date : _____



\$ _____



\$ _____



\$ _____



\$ _____



\$ _____



\$ _____



\$ _____



\$ _____




\$ _____



Dot-to-Dot

Name: _____

Count by 2s. What is this? _____



Patchwork Math

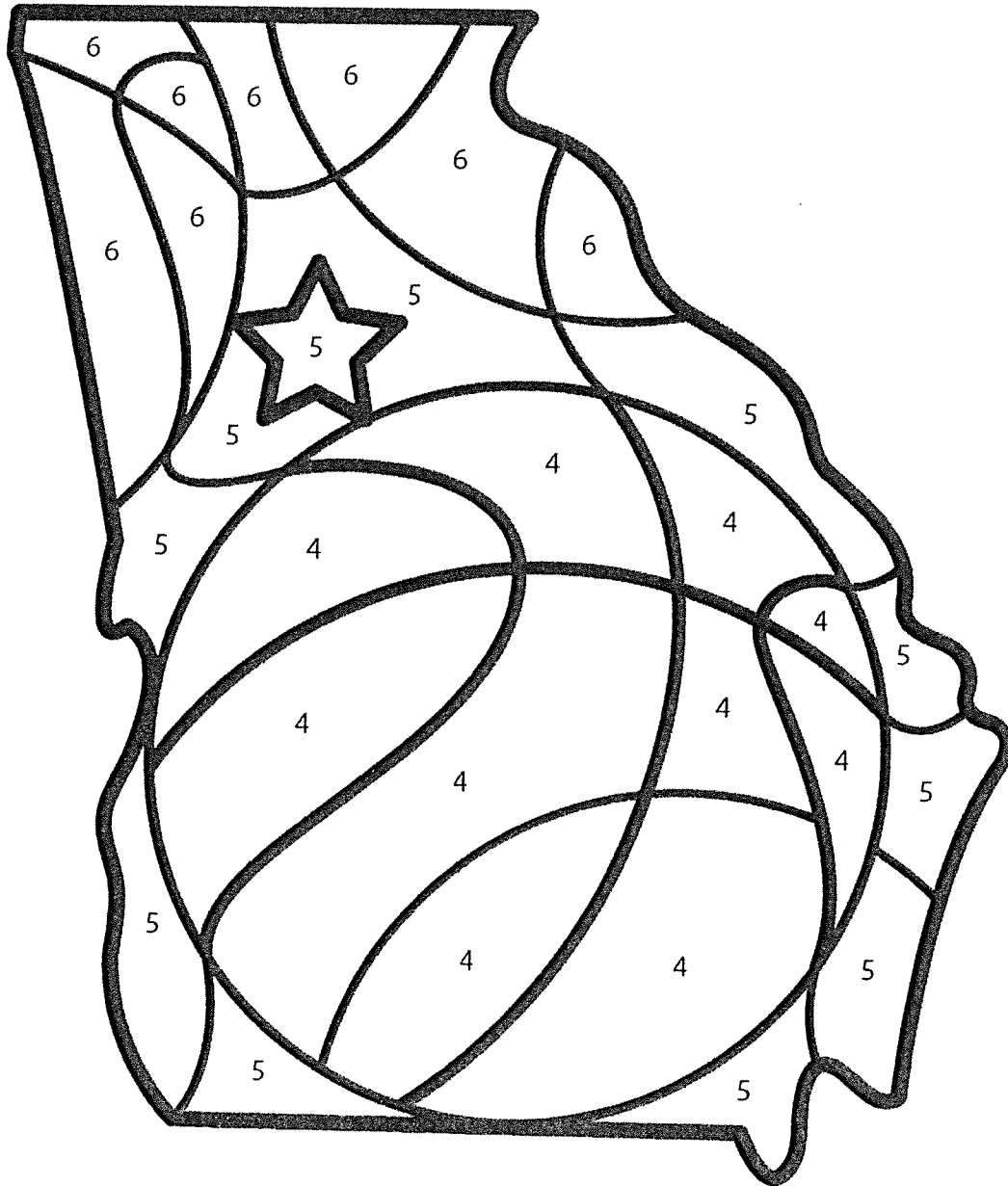
Name: _____

Color the picture of Georgia, using the colors beside the numbers below.

4 = orange

5 = brown

6 = black



What hidden picture did you find?

basketball


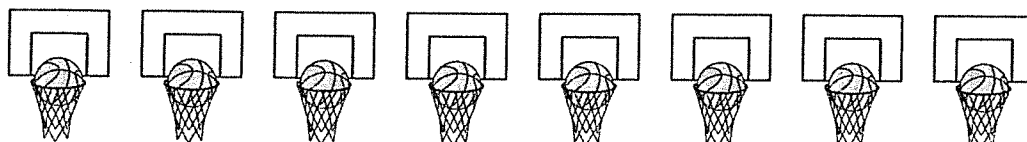


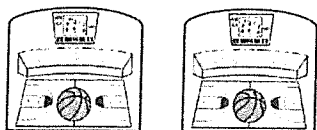
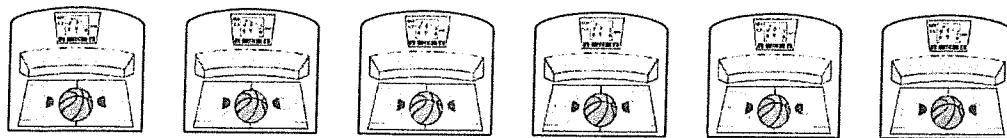
tournament

Which Is Greater?

Name: _____

1. Count the items in each row. Place the number in the box.
2. Place a checkmark in the small box next to the number that is greater.

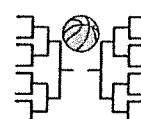
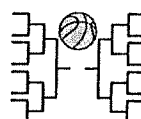
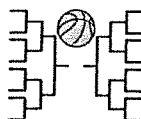
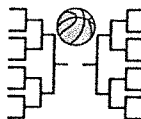
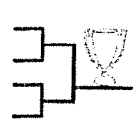
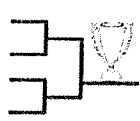


Number Which is
greater?



Which Comes Next?

Name: _____

1. Look at each symbol pattern.
2. Circle the symbol that comes next.

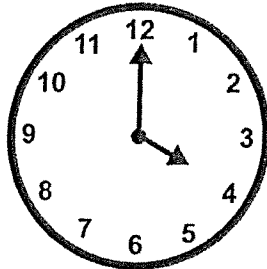


Time to the Hour

Name: _____


Read the question. Find the answer. Place the time on the clock.

This afternoon my brother and his friends played in a basketball game. What time did the basketball game start?




4:00

8:00




This morning janitors cleaned a stadium. What time did the janitors start cleaning the stadium?




10:00

7:00




This morning a family traveled to Atlanta, Georgia. What time did the family arrive in Atlanta?




11:00

9:00




This afternoon a basketball team had a practice. What time did the practice start?




1:00

2:00




This afternoon a college student went to class. What time did the class start?



4:00

3:00

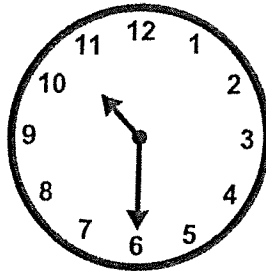


Time to the Half Hour

Name: _____

Read the question. Find the answer. Place the time on the clock.

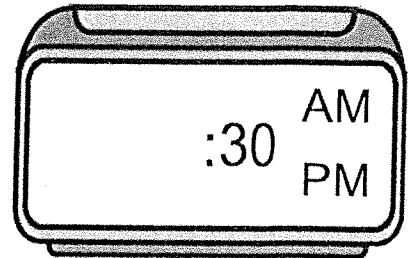
This morning my sister played basketball in gym class. What time did gym class start?



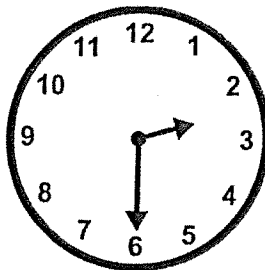
1:30

5:30

10:30



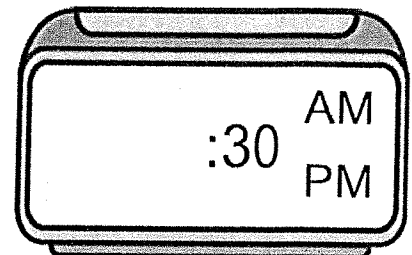
This afternoon a family watched a basketball game on TV. What time did the family start watching the basketball game?



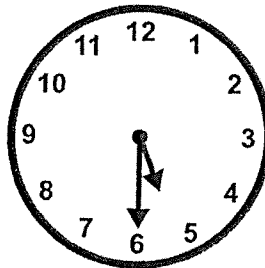
2:30

4:30

6:30



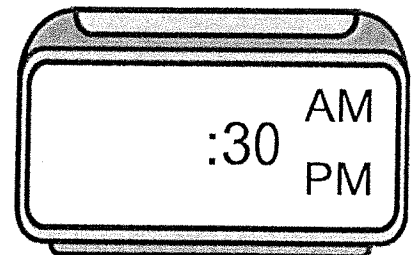
This afternoon my teacher filled in a March Madness bracket. What time did my teacher start filling in the bracket?




3:30

4:30

5:30



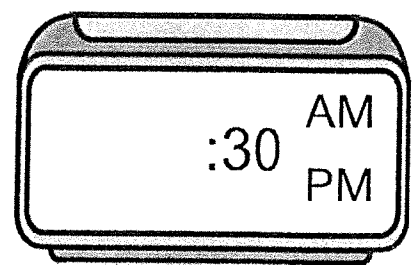
This evening a basketball team had a practice. What time did the practice start?



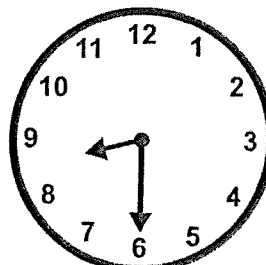
7:30

6:30

5:30



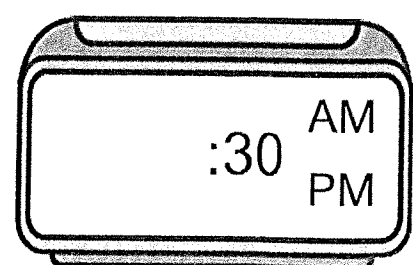
A basketball team played in a tournament today. What time this morning did the tournament start?



8:30

9:30

7:30




Time to the Quarter Hour

Name: _____

Read the question. Find the answer. Place the time on the clock.

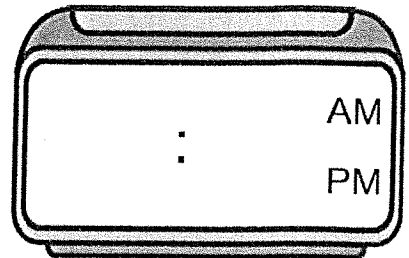
This afternoon a basketball player went for a run. What time did the basketball player start running?



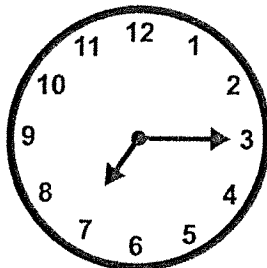
5:15

3:45

12:45



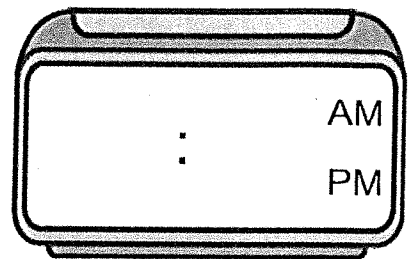
This morning janitors cleaned a stadium. What time did the janitors start cleaning the stadium?



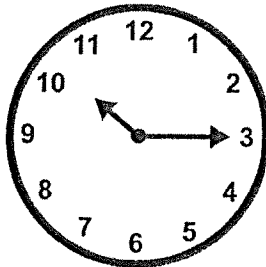
7:15

5:15

9:15



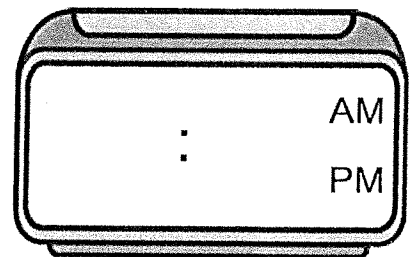
This morning a college basketball player went to a science class. What time did the class start?



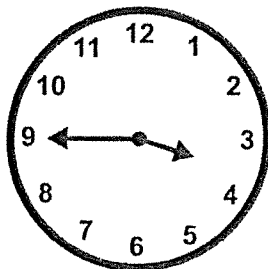
8:15

10:15

7:15



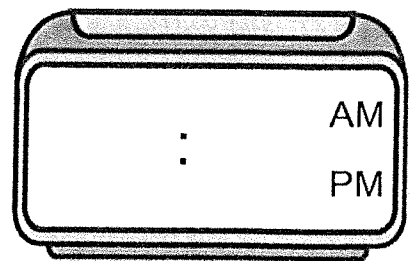
This afternoon a reporter interviewed a basketball coach. What time did the interview start?




3:45

4:45

9:45



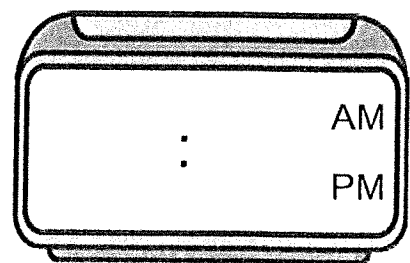
This evening my brother played in a basketball game. What time did the basketball game start?



6:15

7:45

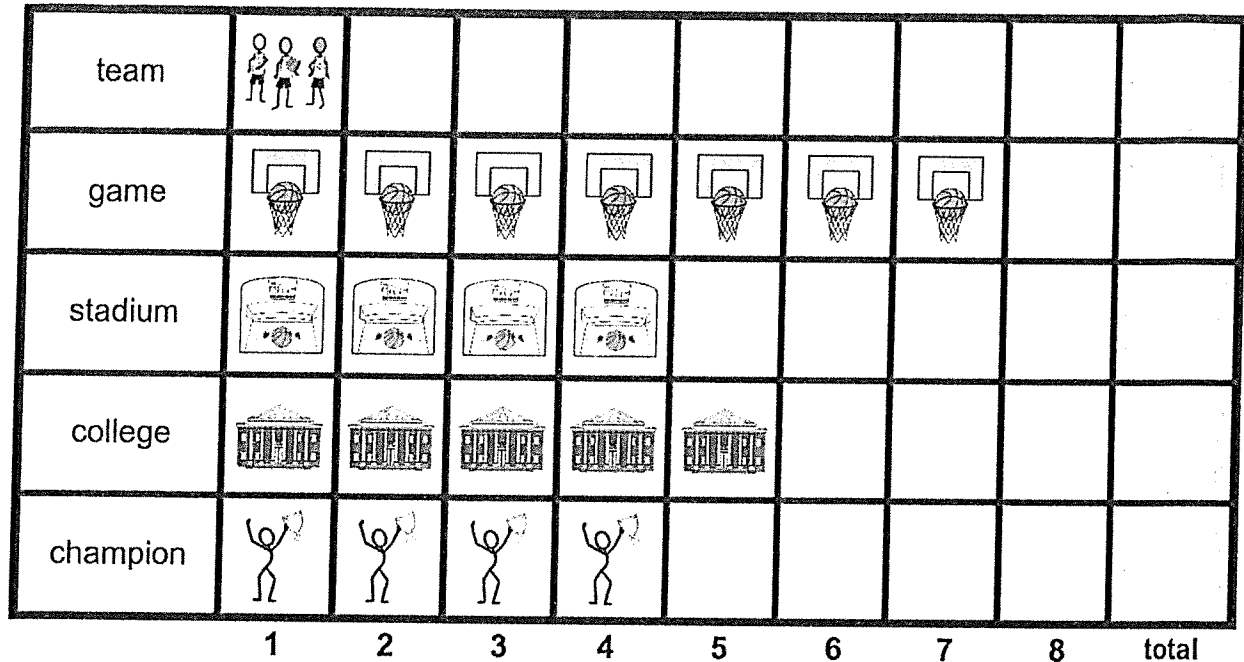
6:45



Graphing

Name: _____

- Count the number of symbols in each row. Place that number in the last column.
- Answer the questions about the graph.

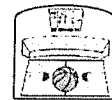


1. Which word has the most symbols?

game

stadium

champion



2. Which word has the fewest symbols?

team

game

college



3. What is the highest number?

1

5

7



4. What is the lowest number?

5

1

4



5. Do any words have the same number?

yes

no

